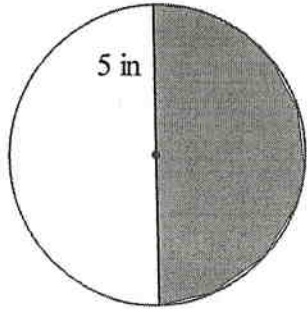


45/5-12

Find the area of the following shaded sectors. Then, find the length of the arc of the shaded sector.

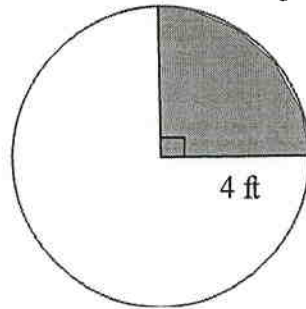
1.



Area:

Arc Length:

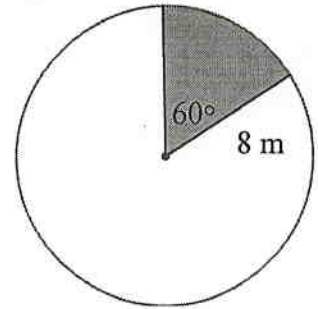
2.



Area:

Arc Length:

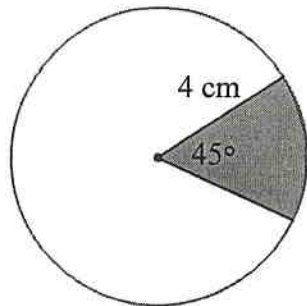
3.



Area:

Arc Length:

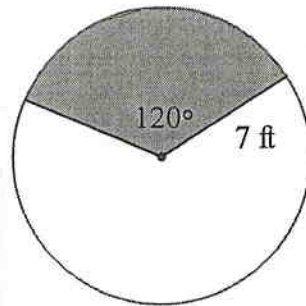
4.



Area:

Arc Length:

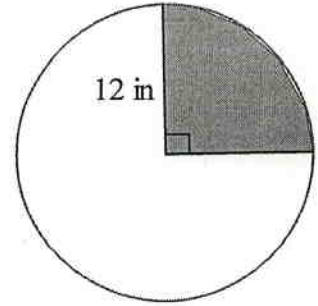
5.



Area:

Arc Length:

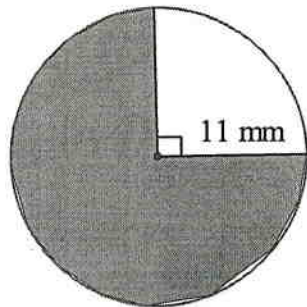
6.



Area:

Arc Length:

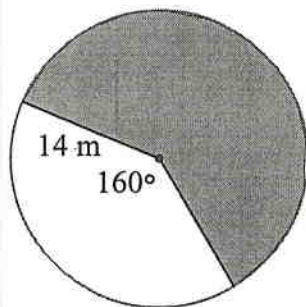
7.



Area:

Arc Length:

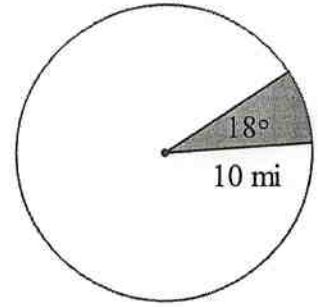
8.



Area:

Arc Length:

9.



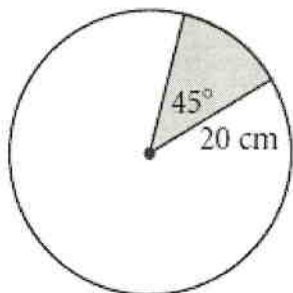
Area:

Arc Length:

Complete the following examples. Be sure to **show all work!**

(Remember to write each equation first!)

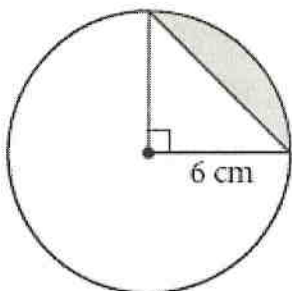
Example: Find the **exact** area of the shaded sector.



Area of shaded sector: _____

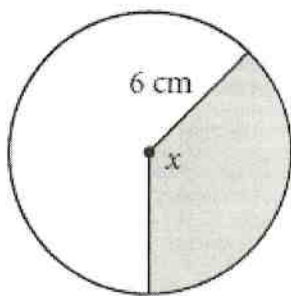
Example: Find the exact area of the shaded segment.

Plan:



Area of shaded segment: _____

Example: The shaded area is $14\pi\text{ cm}^2$, and the radius is 6 cm . Find the **exact** value of x .



$x =$ _____