

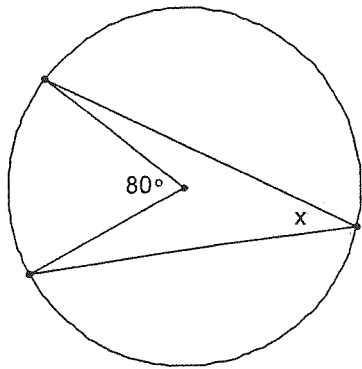
"Inscribed Angles WS"  
 Geometry Unit 6

Name: \_\_\_\_\_

Period: \_\_\_\_\_

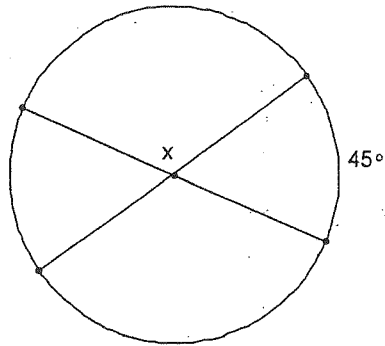
Solve for  $x$ .

1.



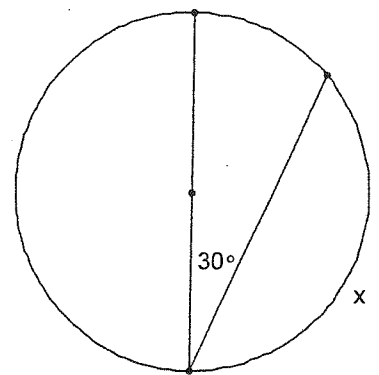
$x =$  \_\_\_\_\_

2.



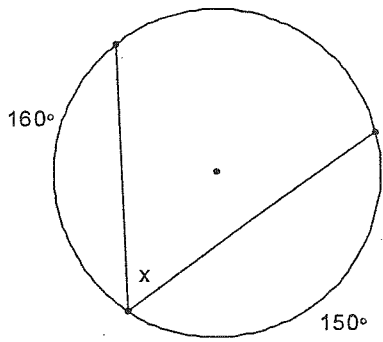
$x =$  \_\_\_\_\_

3.



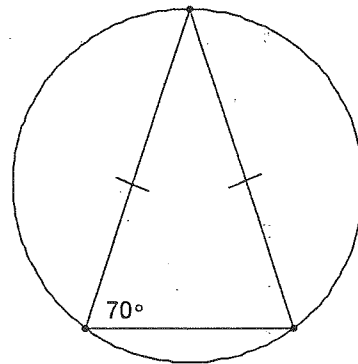
$x =$  \_\_\_\_\_

4.



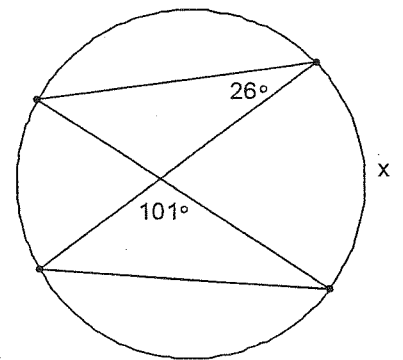
$x =$  \_\_\_\_\_

5.



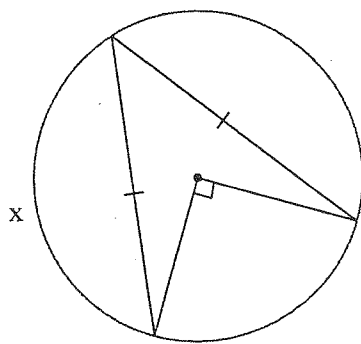
$x =$  \_\_\_\_\_

6.



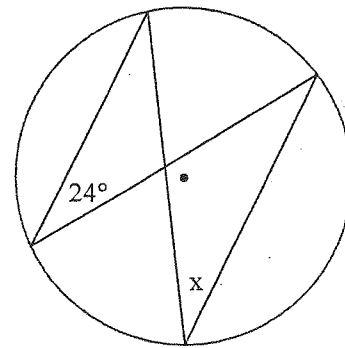
$x =$  \_\_\_\_\_

7.



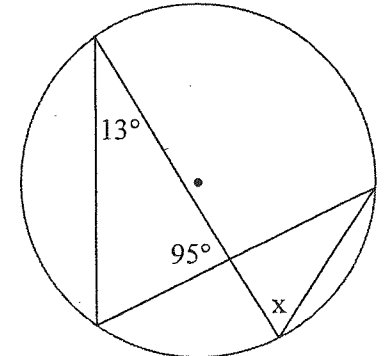
$x =$  \_\_\_\_\_

8.



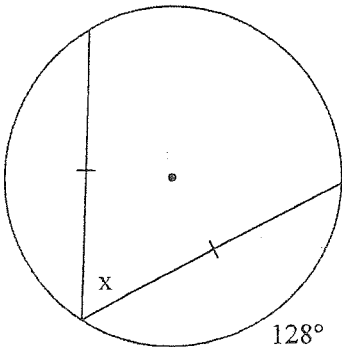
$x =$  \_\_\_\_\_

9.



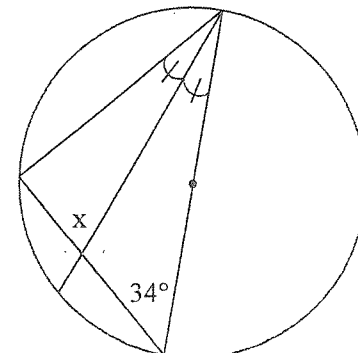
$x =$  \_\_\_\_\_

10.



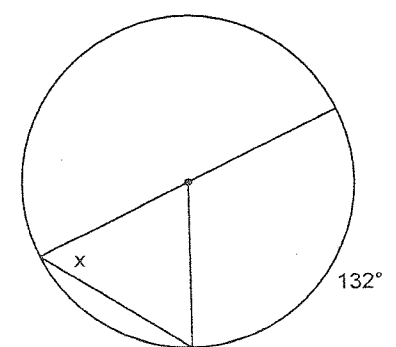
$x =$  \_\_\_\_\_

11.



$x =$  \_\_\_\_\_

12.



$x =$  \_\_\_\_\_